

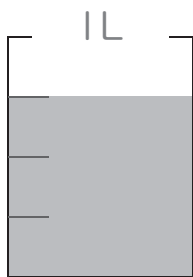
分数の答え

あらわ
分数の表し方




それぞれの かさの分だけ 1L^{ようき}の容器の図に 色をぬりましょう。

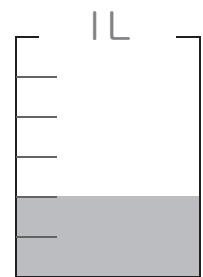
① $\frac{3}{4}$ L




② $\frac{1}{5}$ L




③ $\frac{2}{6}$ L



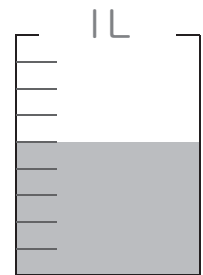
④ $\frac{1}{2}$ L



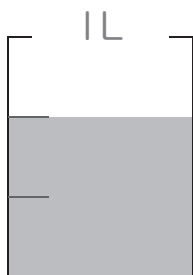
⑤ $\frac{5}{7}$ L



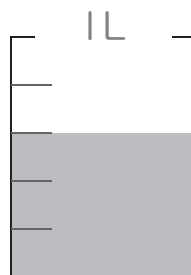
⑥ $\frac{5}{9}$ L



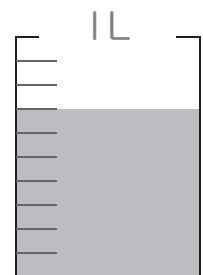
⑦ $\frac{2}{3}$ L



⑧ $\frac{3}{5}$ L



⑨ $\frac{7}{10}$ L




分数の答え

あらわ
分数の表し方

問 それぞれの かさの分だけ ^{ようき} 1Lの容器の図に 色をぬりましょう。

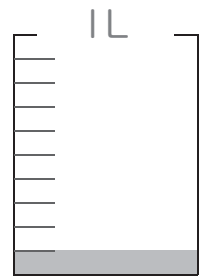
① $\frac{6}{8}$ L




② $\frac{1}{3}$ L



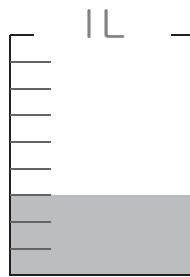
③ $\frac{1}{10}$ L



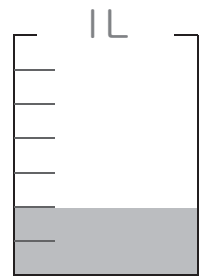
④ $\frac{5}{6}$ L



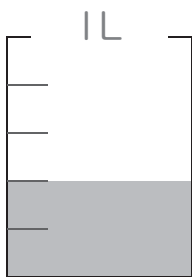
⑤ $\frac{3}{9}$ L




⑥ $\frac{2}{7}$ L



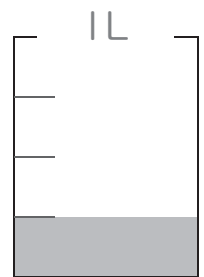
⑦ $\frac{2}{5}$ L



⑧ $\frac{1}{2}$ L



⑨ $\frac{1}{4}$ L



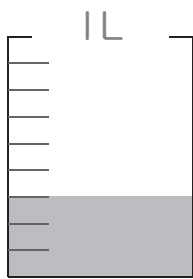
分数の答え

あらわ
分数の表し方

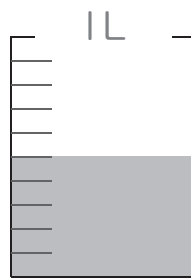


それぞれの かさの分だけ ^{ようき} 1Lの容器の図に 色をぬりましょう。

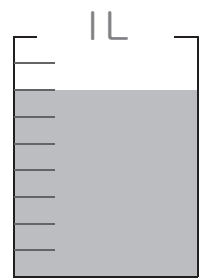
① $\frac{3}{9}$ L



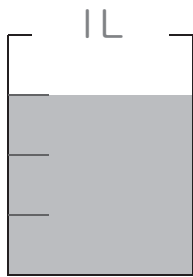
② $\frac{5}{10}$ L




③ $\frac{7}{9}$ L




④ $\frac{3}{4}$ L



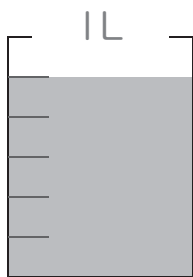
⑤ $\frac{1}{8}$ L



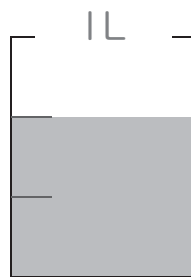
⑥ $\frac{5}{5}$ L



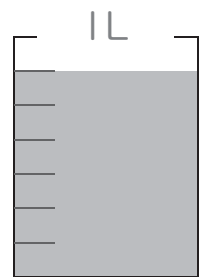
⑦ $\frac{5}{6}$ L



⑧ $\frac{2}{3}$ L



⑨ $\frac{6}{7}$ L



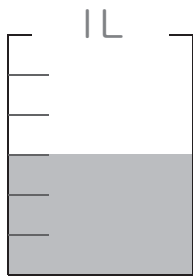
分数の答え

あらわ
分数の表し方

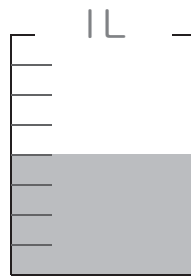


それぞれの かさの分だけ ^{ようき} 1Lの容器の図に 色をぬりましょう。

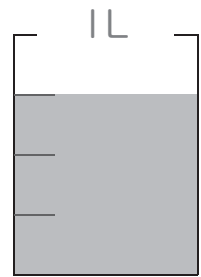
① $\frac{3}{6}$ L



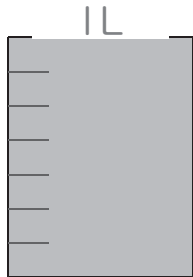
② $\frac{4}{8}$ L




③ $\frac{3}{4}$ L



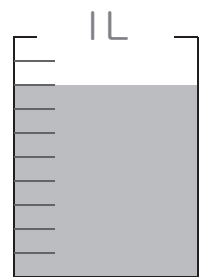
④ $\frac{7}{7}$ L



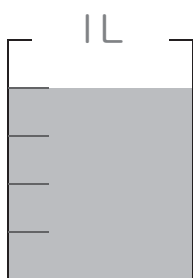
⑤ $\frac{1}{2}$ L



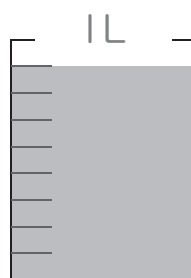
⑥ $\frac{8}{10}$ L



⑦ $\frac{4}{5}$ L



⑧ $\frac{8}{9}$ L



⑨ $\frac{2}{3}$ L

